




# Where is it?



©Bilingual Planet-The Learning Patio




## Where is the fire station?




©Bilingual Planet

## Which avenue is in front of the fire station?





©Bilingual Planet

On which street  
is the fire  
truck driving?



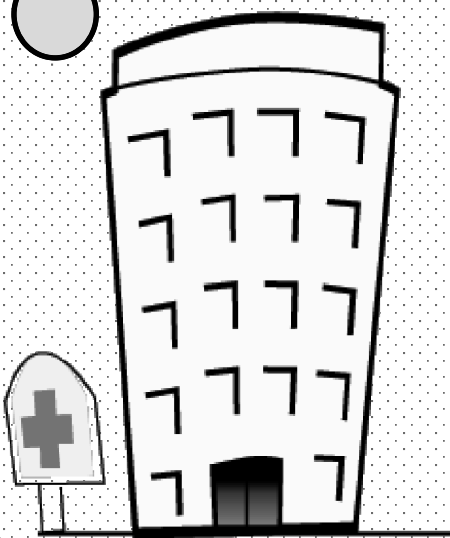
©Bilingual Planet

In which direction is  
the fire truck driving?





©Bilingual Planet

How do you go to the  
hospital from the fire  
station?




©Bilingual Planet

The school is \_\_\_\_\_ of the hospital,  
\_\_\_\_\_ of the library and \_\_\_\_\_  
of Bolívar Avenue.




©Bilingual Planet

The post office is \_\_\_\_\_ of  
the park and is \_\_\_\_\_ of the  
gas station.



©Bilingual Planet


If you live in an apartment and you  
want to spend the day on the farm,  
what route should you take to get to  
the farm?




©Bilingual Planet




○ Which is the shortest route from the school to the fire station?





©Bilingual Planet



Which is the shortest route from the farm to the fire station?




○ How do you walk from the neighborhood to school?





©Bilingual Planet

**Where is the  
school?**




©Bilingual Planet

**Which avenue is  
north of the school?**



**The school bus is on Robledo  
Avenue. What route should  
it take to arrive at  
the school?**



©Bilingual Planet



i




**On which street is  
the library?**


©Bilingual Planet



**How would you walk from  
the neighborhood to the library?**



**Between which  
two streets is the  
library?**



©Bilingual Planet

Between which two streets  
is the park?





©Bilingual Planet

Between which boulevards  
is the park?





The park is \_\_\_\_\_ of the library,  
\_\_\_\_\_ of the post office, \_\_\_\_\_ of the  
hospital and \_\_\_\_\_ of the fire station.



©Bilingual Planet

○ The police station is the \_\_\_\_\_  
part of the city.

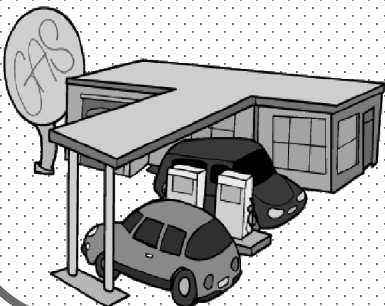


©Bilingual Planet

○ Between which two streets is  
the police station?





○ The police car needs gasoline.  
Which is shortest route to the gas  
station?



©Bilingual Planet

The police station is \_\_\_\_\_ from the school and \_\_\_\_\_ from the fire station.



©Bilingual Planet

Between which two avenues is the police station?



How would you go to the police station if you are at the corner of Robledo Avenue and Bolívar Avenue?




©Bilingual Planet

**Where is the post office?**



©Bilingual Planet

**Which avenue is west of the post office?**




**Between which boulevards is the post office?**




©Bilingual Planet

Which route should the Express Mail truck from the post office take to arrive at the fire station?




©Bilingual Planet

Which place is located in the northeast part of the city?




Which place is located in the southeast part of the city?



©Bilingual Planet




Which place is located in the northwest part of the city?




©Bil

Which place is located in the southwest part of the city?




The hospital is \_\_\_\_\_ from the school, \_\_\_\_\_ from the police station and \_\_\_\_\_ from the park.




©Bilingual Planet

Which boulevard goes east to west?



©Bilingual Planet

Which boulevard goes west to east?




Which goes around  
The city?

• boulevards • avenues • streets


©Bilingual Planet

**In which part of the city do you find the gas station?**




©Bilin-

**In which part of the city do you find the neighborhood?**




**In which part of the city do you find the school?**




©Bi-

- If I want to take a drive around the outside of the city, which route should I take?




©Bilingual Planet

○ The garbage truck is traveling \_\_\_\_\_ on \_\_\_\_\_.




©Bilingual Planet

- If I walk west on Bolívar Avenue and then on Rosales Street I turn left, which boulevard will I come to first?



©Bilingual Planet


**Which place is in the center of the town?**



©Bilingual Planet


**If you are between Chile Avenue and Las Américas Avenue and you walk one block west, which building will you find?**

**Go south on Santana Street. Which building will you find on your right hand side?**




©Bilingual Planet

Which street goes north and south through the whole city?



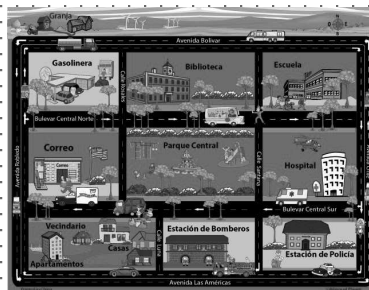
©Bilingual Planet

If I go west on Las Americas Avenue from Chile Avenue and turn right on Santana Street, between what two buildings will I be?




©Bilingual Planet

Luna Street is between \_\_\_\_\_ and \_\_\_\_\_




©Bilingual Planet

**I am in the hospital and I want  
to go to the farm to rest,  
which route should I take?**




©Bilingual Planet

**If I go east on North Central  
Boulevard and then I turn left and  
then right, which street will I be on?**




**I am in the northern part of the city,  
to the east on Bolívar Avenue.**

**Where am I?**




©Bilingual Planet

**I am at the corner of South Central Boulevard and Chile Avenue.  
Which building is in front of me?**




©Bilingual Planet

**We were in the park and we walked  
south on Santana Street.  
What do we have to do to arrive at  
our neighborhood?**



**From my neighborhood I walk  
two blocks east.  
Where will I arrive?**



©Bilingual Planet