


















Name _____



HOW MANY?



Lincoln	   
Washington	 
Obama	     
Trump	    

1. How many pictures of the presidents are there?

- ☐ 17
☐ 15
☐ 16

4. Who has the least number of pictures?

- ☐ Trump
☐ Washington
☐ Obama

2. How many more Obama pictures are there than Trump's?

- ☐ 1
☐ 2
☐ They have the same amount

5. Who has the most amount of pictures?

- ☐ Lincoln
☐ Obama
☐ Trump

3. How many less pictures of Trump than Obama are there?

- ☐ The same
☐ 2
☐ 1

Who has two more than Lincoln?

- ☐ Trump
☐ Washington
☐ Obama