



Which route should the Express Mail truck from the post office take to arrive at the fire station?




©Bilingual Planet

Which place is located in the northeast part of the city?



Which place is located in the southeast part of the city?



©Bilingual Planet