


Name \_\_\_\_\_

## Ordinal Numbers


1. Draw a circle around the **second** object. Mark with an X the **ninth** one.



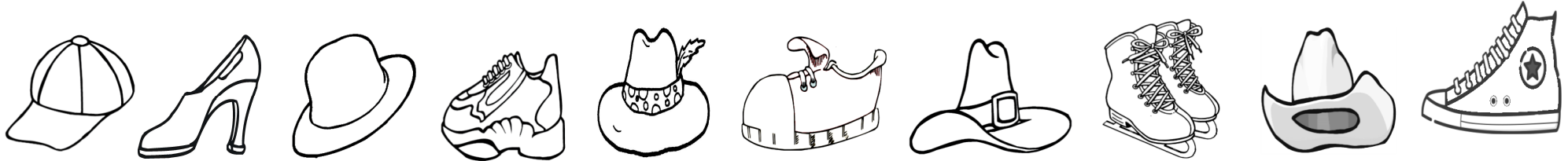
2. Draw a circle around the **first** ice cream. Mark with an X the **tenth** one.



3. Draw a circle around the **third** animal. Mark with an X the **sixth** one.



4. Draw a circle around the **fifth** item. Mark with an X the **seventh** one.



5. Draw a circle around the **fourth** vehicle. Mark with an X the **eighth** one.

