







Name _____



11:00
23:00



Draw a line to match each clock with
the correct time.



1:00
13:00

3:00
15:00

9:00
21:00

11:00
23:00

10:00
22:00

4:00
16:00