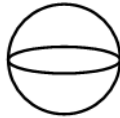
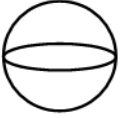
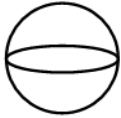
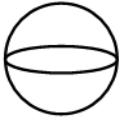
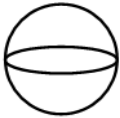
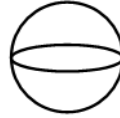
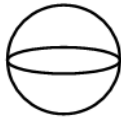
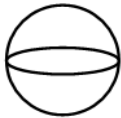
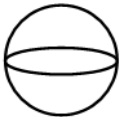
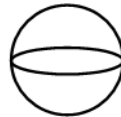
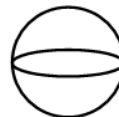
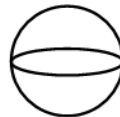
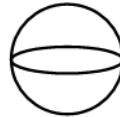
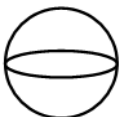

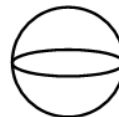

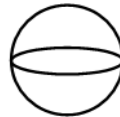
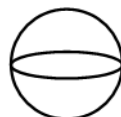
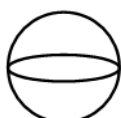

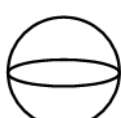


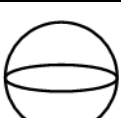


3-D Shape Survey: Spheres

Name: _____

Miss Yellow took her class out to survey how many spheres they saw in different areas around their school.

Each  = 4 spheres

Candy Store							
Gym							
Toy Store							
Nature							
Grocery Store							
Library							

1. Where was the most common place to find spheres?
How many were there?
2. Where was the least common place to find spheres?
How many were there?
3. How many spheres were seen in total?
4. How many more spheres were found in the Candy Store than in the Toy Store?
5. If you combine the total spheres from the Gym and the Grocery Store, how many are there altogether?