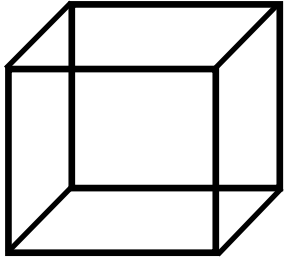


3-D Shapes

Name: _____

Cube

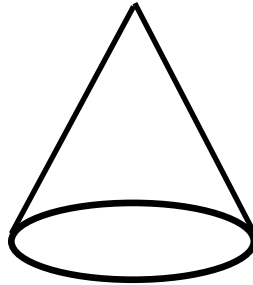


Faces: _____

Edges: _____

Corners: _____

Cone

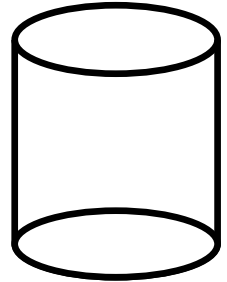


Faces: _____

Edges: _____

Corners: _____

Cylinder

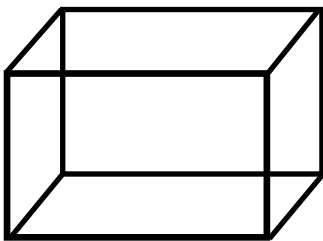


Faces: _____

Edges: _____

Corners: _____

Rectangular Prism

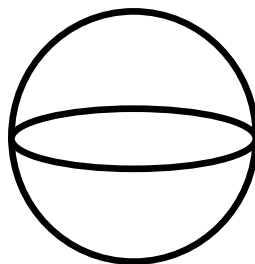


Faces: _____

Edges: _____

Corners: _____

Sphere

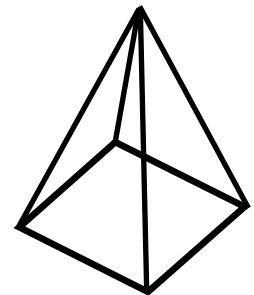


Faces: _____

Edges: _____

Corners: _____

Pyramid



Faces: _____

Edges: _____

Corners: _____