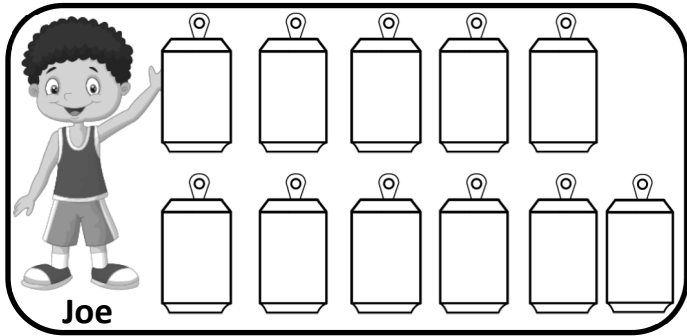


Name _____

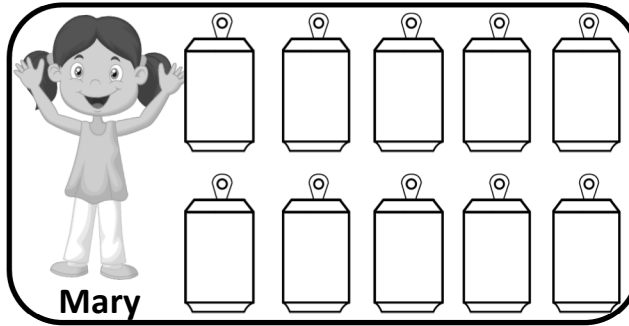
Date _____

Joe, Mary and Susy collected cans. Use the pictogram to complete the information.




Joe

Total cans _____



Mary

Total cans _____



Susy

Total cans _____

Count the cans and tally

Joe	Mary	Susy
-----	------	------

Make a bar graph

