

Name _____

Look at the graphs and answer the questions.

1. Which graph has one  more than  ?

- A
- B
- C
- A and B


2. Which graph has two girls and two boys?

- A
- B
- C
- A and B

3. Which graph has the same amount?


- A and C
- B and A
- C and B
- A and B

Look at the picture and analyze the graphs below.




Fill in the circle of the graph that shows the number of boys and girls.

A.



B.



C.

