







Name _____



Draw a line to match each clock with the correct time.



1:00

3:00

9:00

11:00

10:00

4:00