









Name _____

Let's Subtract



						$6 - 1 = 3$
---	---	---	---	---	---	-------------

1 2 3 4 5 6 7 8 9 10



				$4 - 1 = \underline{\quad}$
---	---	---	---	-----------------------------



					$5 - 3 = \underline{\quad}$
---	---	---	---	---	-----------------------------

						$6 - 5 = \underline{\quad}$
---	---	---	---	---	---	-----------------------------



				$4 - 3 = \underline{\quad}$
--	--	--	--	-----------------------------



			$3 - 1 = \underline{\quad}$
---	---	---	-----------------------------



						$6 - 4 = \underline{\quad}$
---	---	---	---	---	---	-----------------------------



					$5 - 2 = \underline{\quad}$
---	---	---	---	---	-----------------------------



				$4 - 2 = \underline{\quad}$
---	---	---	---	-----------------------------



						$6 - 5 = \underline{\quad}$
---	---	---	---	---	---	-----------------------------



					$5 - 4 = \underline{\quad}$
---	---	---	---	---	-----------------------------

