









Nombre _____

Vamos a restar



						$6 - 3 = 3$
---	---	---	--	--	--	-------------

1 2 3 4 5 6 7 8 9 10



$5 - 4 = \underline{\quad}$



$6 - 2 = \underline{\quad}$



$4 - 1 = \underline{\quad}$



$6 - 5 = \underline{\quad}$



$5 - 2 = \underline{\quad}$



$3 - 3 = \underline{\quad}$



$4 - 2 = \underline{\quad}$



$5 - 1 = \underline{\quad}$



$4 - 3 = \underline{\quad}$



$6 - 2 = \underline{\quad}$

